

$$\sqrt[3]{64}$$

$$3^2 + 10^2$$

$$\sqrt{144}$$

$$\sqrt{9} + \sqrt{4}$$

**LIFE IS MATH
AROUND US**



**ERASMUS PROJECT
2020-2022** 

**LIFE IS MATH
AROUND US**



**ERASMUS PROJECT
2020-2022** 

**LIFE IS MATH
AROUND US**



**ERASMUS PROJECT
2020-2022** 

**LIFE IS MATH
AROUND US**



**ERASMUS PROJECT
2020-2022** 

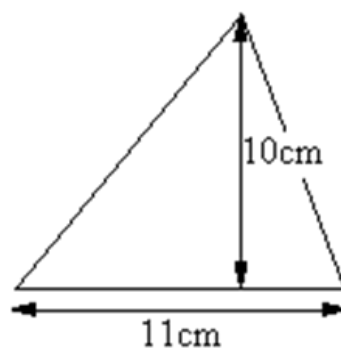
$$\sqrt{100} - \sqrt{64}$$

$$\sqrt{1444} - \sqrt{400}$$

Convert a
decimal to
a fraction:

2,50

Calculate the
area of a
triangle



**LIFE IS MATH
AROUND US**



**ERASMUS PROJECT
2020-2022** 

**LIFE IS MATH
AROUND US**



**ERASMUS PROJECT
2020-2022** 

**LIFE IS MATH
AROUND US**





**ERASMUS PROJECT
2020-2022** 


**LIFE IS MATH
AROUND US**



**ERASMUS PROJECT
2020-2022** 


$$\sqrt{25 \times 4}$$


$$20 \div 4$$


$$\sqrt{36} \div \sqrt{4}$$


$$\sqrt{6400} - \sqrt{4}$$

**LIFE IS MATH
AROUND US**



**ERASMUS PROJECT
2020-2022** 

**LIFE IS MATH
AROUND US**



**ERASMUS PROJECT
2020-2022** 

**LIFE IS MATH
AROUND US**



**ERASMUS PROJECT
2020-2022** 

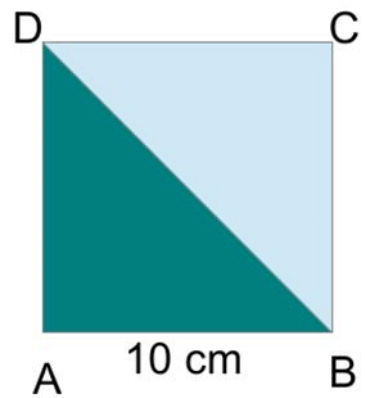
**LIFE IS MATH
AROUND US**



**ERASMUS PROJECT
2020-2022** 

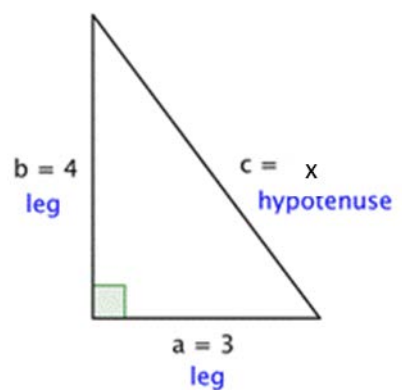
$$\sqrt{625} + \sqrt{81}$$

Calculate the area of a square



$$\sqrt{1600} - \sqrt{900}$$

Calculate the hypotenuse of a triangle with Pythagoras theorem



**LIFE IS MATH
AROUND US**



**ERASMUS PROJECT
2020-2022** 

**LIFE IS MATH
AROUND US**



**ERASMUS PROJECT
2020-2022** 

**LIFE IS MATH
AROUND US**



**ERASMUS PROJECT
2020-2022** 

**LIFE IS MATH
AROUND US**



**ERASMUS PROJECT
2020-2022** 