

**SUPER SCIENTIST: EXCRETORY SYSTEM TEST.**

SCIENCE:

NAME: .....

DATE: .....

**1.- TEST. Answer the following questions.**

**1. MATCH ( —————>) the functions with the organs/systems:**

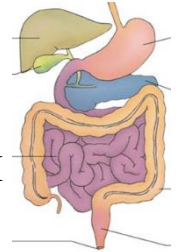
To REMOVE harmful GASES when we exhale (carbon dioxide).

To EXPEL the UNDIGESTED FOOD our body does NOT need.

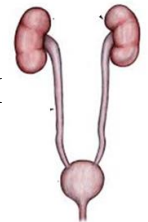
To REMOVE dead cells, salt and unused water from SWEATING.

To REMOVE WASTE and keep our body CLEAN.

\* DIGESTIVE SYSTEM



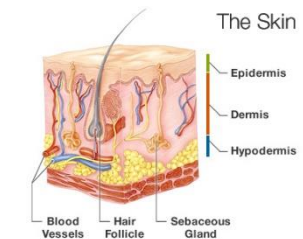
\* URINARY SYSTEM



\* LUNGS

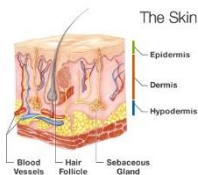


\* SKIN

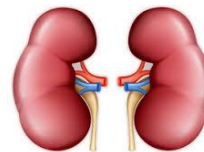


**2. Which is NOT part of the EXCRETORY SYSTEM?**

Skin



Kidney



Heart



Lungs



**3. The main function of the URINARY SYSTEM is to:**

- A) REMOVE waste and extra fluid from our body
- B) KEEP waste in the body
- C) MAKE you poop

**4. What very important JOB do KIDNEYS have?**

- A) To REABSORB useful nutrients
- B) To FILTER waste out of the BLOOD
- C) ALL of the above

**5. Kidney SHAPE is like**

- Apples
- Beans
- Oranges

**6. How many KIDNEYS a human has?**

- 2
- 3
- 4

**7. Urine is carried from the KIDNEYS to the BLADDER by two thin TUBES called:**

- A) Ureters
- B) Tubulars
- C) Capillaries

**8. URINE IS STORED here until you're ready to pee:**

- A) Kidneys
- B) Bladder
- C) The garage

**9. URINE EXITS THE BLADDER and the body through a TUBE called the:**

- A) Ureter
- B) Urinary tract
- C) Urethra

**10. If your pee is LIGHT YELLOW, it means that:**

- A) You ARE hydrated
- B) You are NOT hydrated
- C) You are NOT getting enough sun

**11. Urine is made of:**

- A) Water and nutrients
- B) Water and lemonade
- C) Water and waste products

**2. Label the diagram of the EXCRETORY SYSTEM.**

