





Oblicz równania. Wytnij z ramki odpowiedź i wklej w odpowiednie miejsce.

 $+$  $=$ 

 $-$  $=$ 

 +  = 

 -  = 

- |                                                                                     |                                                                                      |                                                                                       |                                                                                       |
|-------------------------------------------------------------------------------------|--------------------------------------------------------------------------------------|---------------------------------------------------------------------------------------|---------------------------------------------------------------------------------------|
|  |  |  |  |
|-------------------------------------------------------------------------------------|--------------------------------------------------------------------------------------|---------------------------------------------------------------------------------------|---------------------------------------------------------------------------------------|