








Zatocz do pętli, kratki z odpowiednimi cyframi.



	
<b>3</b> <b>5</b> <b>7</b>	<b>3</b> <b>5</b> <b>7</b>
	
<b>2</b> <b>6</b> <b>8</b>	<b>10</b> <b>4</b> <b>7</b>
	
<b>5</b> <b>9</b> <b>10</b>	<b>6</b> <b>9</b> <b>5</b>



**Doprowadź pszczółkę do ula.**



Oblicz równania.



$$\begin{array}{c} \text{[ 3 beehives} + \text{2 beehives} = \text{[ ]} \end{array}$$



$$\begin{array}{c} \text{[ 9 bees} - \text{3 bees} = \text{[ ]} \end{array}$$



$$\begin{array}{c} \text{[ 6 honeycombs} + \text{3 honeycombs} = \text{[ ]} \end{array}$$



$$\begin{array}{c} \text{[ 10 honeycombs} - \text{6 honeycombs} = \text{[ ]} \end{array}$$

